



# **MATH ACTIVITIES LEVEL 1**

## **WITH**

### **CLEVER HEDGEHOG**







**FREE PRINTABLES FOR KIDS**

*Download your copy of the activity bundle*


**WWW.EBOOKS4UKRKIDS.ORG**




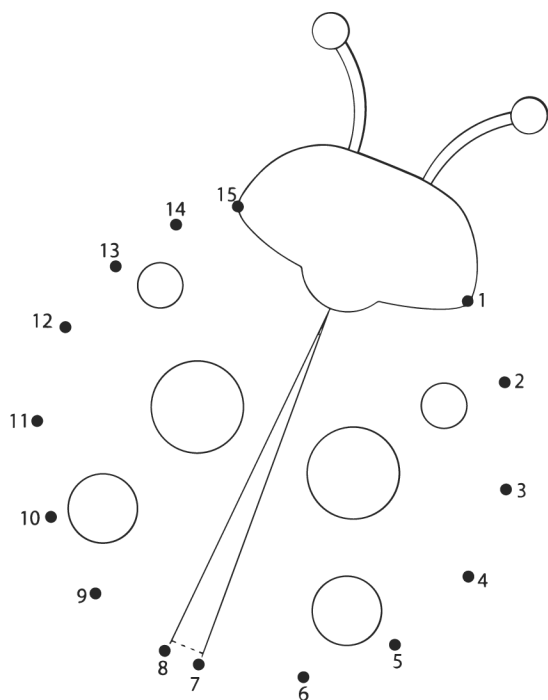
# COUNT ANIMALS AND WRITE YOUR NUMBERS IN BOXES



## SOLVE THE PROBLEM AND WRITE THE ANSWER



**CONNECT THE DOTS FROM NUMBER 1 AND UP TO SEE WHAT ANIMALS  
CLEVER HEDGEHOG MET ON HIS LAST TRIP. COLOR THE ANIMALS.**



[Find More Free Printable PDF activity packs on our website](http://www.ebooks4ukrkids.org)

[www.ebooks4ukrkids.org](http://www.ebooks4ukrkids.org)



Scan QR code

## SOLVE EQUATIONS



**7 bunnies were playing in the forest. 4 bunnies went away. How many bunnies are left to play?**

$$7 - 4 = \square$$

**The elephant used 5 small buckets and 3 big buckets of sand to build a sand castle. How many buckets of sand were used in total?**







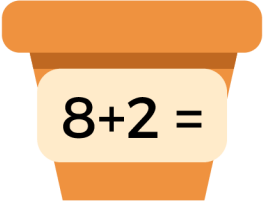
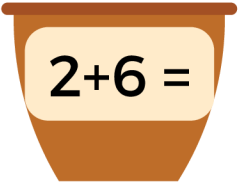


$$5 + 3 = \square$$



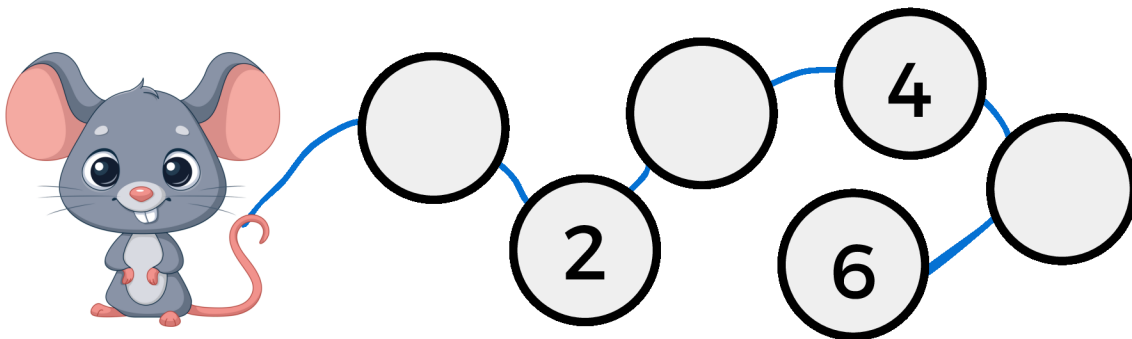
**A fisherman caught 4 fish. He gave half of his catch to a friend. How many fish did he keep to himself?**

$$4 - 2 = \square$$

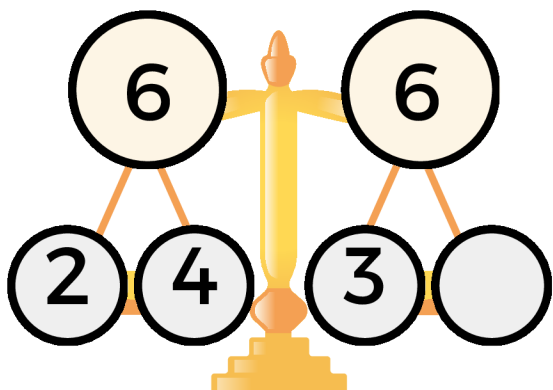
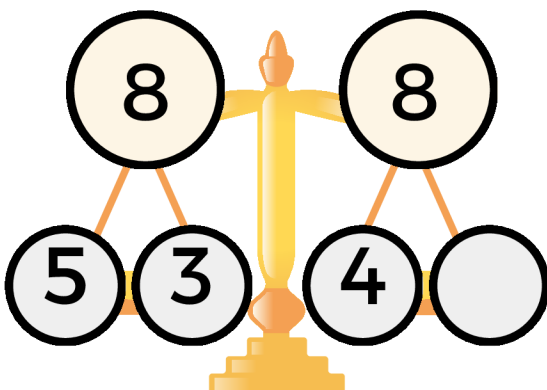
## SOLVE EQUATIONS TO FIND THE RIGHT FLOWER POT FOR A FLOWER

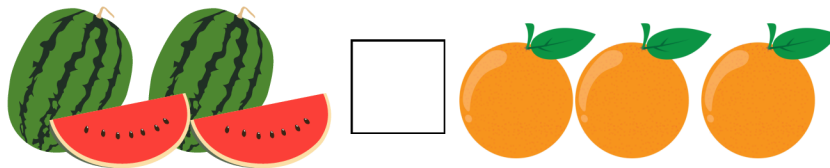





## WRITE THE MISSING NUMBERS



## WRITE NUMBERS THAT WILL KEEP SCALES IN BALANCE

	
---	--

## WHAT IS MORE, LESS OR EQUAL?



## SOLVE THE PROBLEM AND WRITE THE ANSWER

There were 2 dinosaurs in the forest. 4 dinosaur friends came to visit. How many dinosaurs are now in the forest?

There were  dinosaurs.

dinosaurs came.

dinosaurs in total.

$$\square + \square = \square$$

